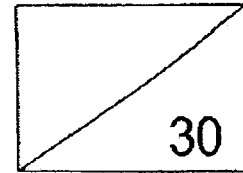


Primary 3
Class Test 1
Mathematics



Name: _____ ()

Date: 1 March 2017

Class: _____

Duration: 50 minutes

Section A: 5 Questions (2 marks each)

Choose the correct answer and write its number in the brackets provided.

1. Find the sum of 6 310 and 766.

- (1) 5 544
- (2) 6 076
- (3) 6 456
- (4) 7 076

()

2. $2\,314 + \star = 2\,399$

What is the value of \star ?

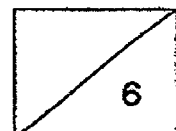
- (1) 80
- (2) 85
- (3) 4 685
- (4) 4 713

()

3. In the number 4 268, the value of the digit _____ is the greatest.

- (1) 6
- (2) 2
- (3) 8
- (4) 4

()



4. 3 920 is 3 tens less than _____.

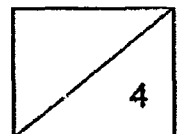
- (1) 3 890
- (2) 3 917
- (3) 3 923
- (4) 3 950

()

5. What is the smallest 4-digit even number that can be formed using the digits 7, 9, 3 and 2?

- (1) 3 792
- (2) 2 397
- (3) 2 379
- (4) 3 972

()



Section B: 6 Questions (2 marks each)

Work out the following sums and write the answers in the spaces provided.

6. Write 3 798 in words.

Ans: _____

7. Find the difference of 4 582 and 2 769.

Ans: _____

8. Arrange the numbers in order, beginning with the greatest.

7 230

7 320

7 302

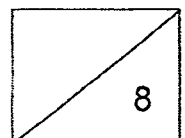
7 203

Ans: _____, _____, _____, _____
(greatest) (smallest)

9. What is the answer in the box?

$$\begin{array}{r} 7\,230 \\ - \quad \square \\ \hline 3\,399 \end{array}$$

Ans: _____



10. Find the missing number.

900, _____, 600, 450, 300

Ans: _____

11.

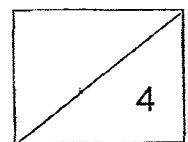
$$\text{☀} = 2$$

$$\text{☀} + \text{☾} = 5$$

$$\text{☾} + \text{☁} = 9$$

Find the value of $\text{☀} + \text{☾} + \text{☁}$.

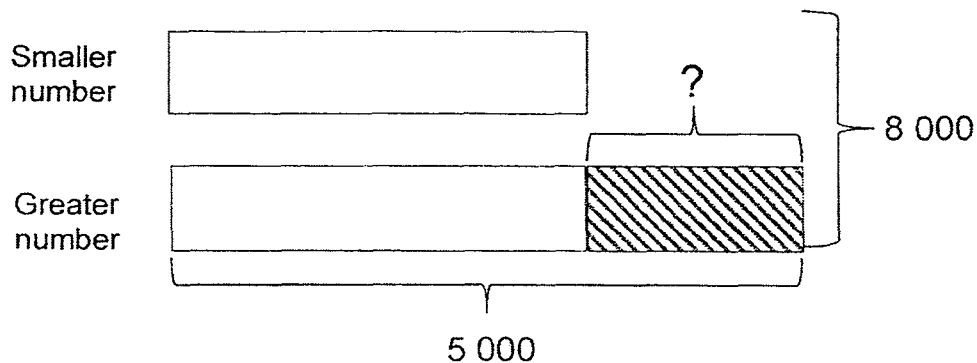
Ans: _____



Section C: 2 Questions (4 marks each)

Do the following sums. Show your workings and statements clearly.

12. The sum of two numbers is 8 000. The greater number is 5 000.
What is the difference between the two numbers?

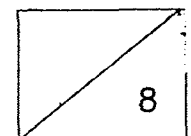



Ans: _____

13. 2 680 women attended a concert.
There were 190 fewer women than men at the concert.
How many people attended the concert altogether?

Ans: _____

End of paper





EXAM PAPER 2017(p3)

SCHOOL : RED SWASTIKA

SUBJECT : Mathematics

TERM : CA1

Q1	Q2	Q3	Q4	Q5
4	2	4	4	1

6) three thousand seven hundred and ninety eight

7) 1813

8) 7320 7302 7230 7203

9) 3831

10) 750

11) 11

12) $8000 - 5000 = 3000$

$5000 - 3000 = 2000$

The difference between the two numbers is 2000

13) $2680 + 190 = 2870$

$$2870 + 2680 = 5550$$

5550 people attended the concert.